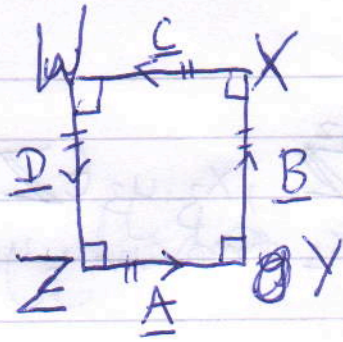


Q1.



Here we choose the sides of the square as vectors

$$\text{let: } \underline{A} = \begin{pmatrix} x \\ y \end{pmatrix}$$

$$\text{Then } \underline{B} = \begin{pmatrix} -y \\ x \end{pmatrix} \text{ or } \begin{pmatrix} y \\ -x \end{pmatrix} \quad \begin{matrix} x \in \mathbb{R} \\ y \in \mathbb{R} \end{matrix}$$

$$\underline{C} = -\underline{A} = \begin{pmatrix} -x \\ -y \end{pmatrix}$$

$$\underline{D} = -\underline{B} = \begin{pmatrix} y \\ -x \end{pmatrix} \text{ or } \begin{pmatrix} -y \\ x \end{pmatrix}$$

So we see for a given \underline{A} there are 2 possibilities for a square

Q2 If \underline{A} joins the vertices Z and Y which are g_1

$$\text{let, } \underline{Z} \equiv (x_1, y_1) \text{ and } \underline{Y} \equiv (x_2, y_2) \quad x_1, y_1, x_2, y_2 \in \mathbb{Z}$$

We want to prove that $\underline{A} \in \mathbb{Z}$

$$\text{If } \underline{X} \equiv (x_3, y_3) \text{ and } \underline{W} \equiv (x_4, y_4)$$

$$\text{Then } x_3, y_3, x_4, y_4 \in \mathbb{Z}$$

Now,

$$\text{Now, } \begin{pmatrix} x \\ y \end{pmatrix} = \begin{pmatrix} x_2 \\ y_2 \end{pmatrix} - \begin{pmatrix} x_1 \\ y_1 \end{pmatrix}$$

$$\text{or } \begin{pmatrix} x \\ y \end{pmatrix} = \begin{pmatrix} x_2 - x_1 \\ y_2 - y_1 \end{pmatrix}$$

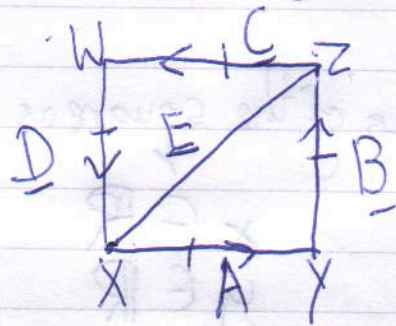
$$\text{or } x = x_2 - x_1 \text{ and } y = y_2 - y_1$$

$$\text{Now, } x_2, x_1, y_2, y_1 \in \mathbb{Z} \Rightarrow x, y \in \mathbb{Z}$$

$$\text{Now } \underline{B} = \begin{pmatrix} -y \\ x \end{pmatrix} \text{ or } \begin{pmatrix} y \\ -x \end{pmatrix}$$

$$\text{Case 1: } \underline{B} = \begin{pmatrix} -y \\ x \end{pmatrix} = \begin{pmatrix} x_3 \\ y_3 \end{pmatrix} - \begin{pmatrix} x_2 \\ y_2 \end{pmatrix}$$

or, $-y = x_2 - x_1$ and $x = y_3 - y_2$
 $x, y \in \mathbb{Z}$ and $x_2, y_2 \in \mathbb{Z}$, $x_3, y_3 \in \mathbb{Z}$
 This also implies for $x = x_4$ and $y = y_4$ and Case 2.



Given: ~~I need to find~~
 $|A| = |B|$
 E at 45° to A and B
 $E \in \mathbb{Z}$
 $E = A + B$

I need to find A, B given E

$$\text{let } \underline{E} = \begin{pmatrix} x \\ y \end{pmatrix} \quad \underline{A} = \begin{pmatrix} x_1 \\ y_1 \end{pmatrix} \quad \underline{B} = \begin{pmatrix} x_2 \\ y_2 \end{pmatrix}$$

$$\begin{pmatrix} x \\ y \end{pmatrix} = \begin{pmatrix} x_1 \\ y_1 \end{pmatrix} + \begin{pmatrix} x_2 \\ y_2 \end{pmatrix}$$

$$\underline{B} = \begin{pmatrix} -y_1 \\ x_1 \end{pmatrix} \text{ or } \begin{pmatrix} y_1 \\ -x_1 \end{pmatrix}$$

$$\text{let } \underline{B} = \begin{pmatrix} -y_1 \\ x_1 \end{pmatrix}$$

$$\text{Then } \begin{pmatrix} x \\ y \end{pmatrix} = \begin{pmatrix} x_1 - y_1 \\ y_1 + x_1 \end{pmatrix}$$

$$\text{or } x = x_1 - y_1 \text{ and } y = y_1 + x_1$$

$$\text{or } x = \begin{pmatrix} x_1 \\ -y_1 \end{pmatrix} + \begin{pmatrix} y_1 \\ x_1 \end{pmatrix}$$

$$\text{or } x - y = -2y_1$$

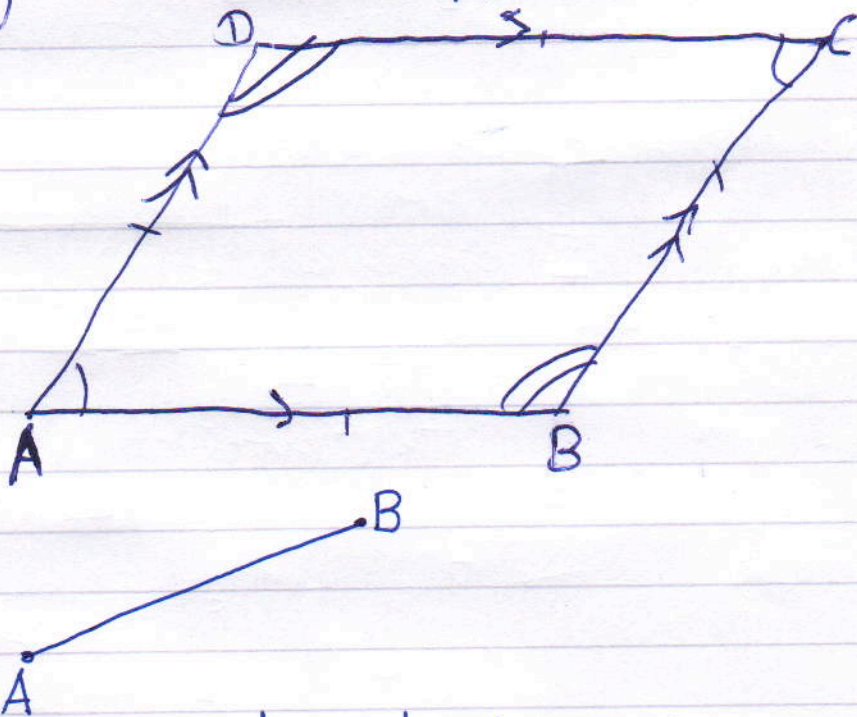
$$\text{or } 2y = y - x$$

$$\text{or } y_1 = \frac{y-x}{2}$$

$$x_1 = \frac{x+y}{2}$$


Q. We know x, y are integers. ~~because~~ However, x_1 and y_1 will not all ways be integer valued. It will be integer valued when $y-x$ and $x+y$ are even.

Charlie is right because there is no fixed angle in a rhombus' corner. ^(angle ABC) So there are ∞ possibilities for the rhombus $ABCD$.



We are going to construct a circle using A as the centre and AB as the radius. The number of points on the circle that lie on grid points are the number of rhombuses that have their vertices on grid points.

Yes I agree with Alison




$$x - y = 11 \dots$$

$$\frac{x+y}{2} = x$$

called CD

We are going to draw another straight line at 90° to AB and then check if c and d are grid points. Then CD is the other diagonal of the rhombus ABCD.



He is going to construct a circle using the center and AB as the radius. The number of points on the circle that are on grid points are the number of rhombuses that have their vertices on grid points.

be I agree with Alison